

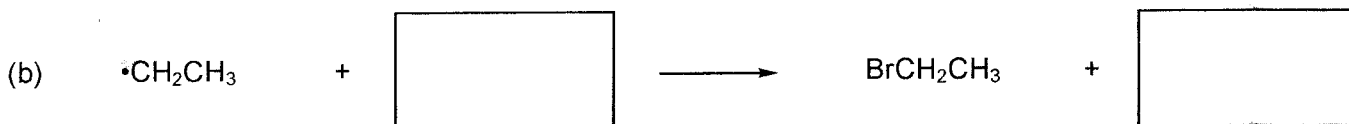

Quiz 5 (33 points)

1. Fill in the boxes for the following free radical bromination of ethane (24 points):


i) Initiation:



ii) Propagation:



iii) Termination:



2. Predict the products and their approximate ratio in the following bromination reaction. (8 points)

